
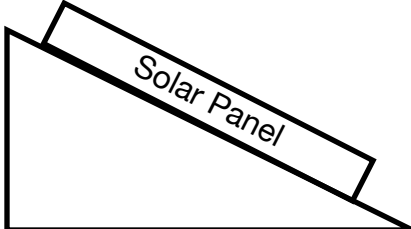
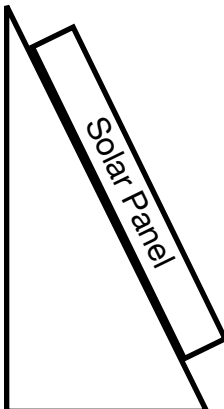
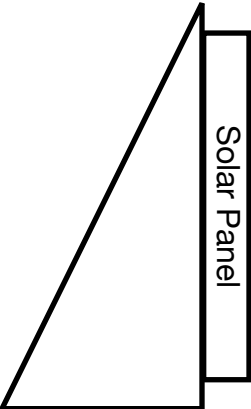


LAB: ANGLE OF INSOLATION WITH SOLAR PANELS

90° Angle of Insolation	60° Angle of Insolation	30° Angle of Insolation	0° Angle of Insolation
			
<u>Volt Meter:</u>	<u>Volt Meter:</u>	<u>Volt Meter:</u>	<u>Volt Meter:</u>
High or Low Energy?	High or Low Energy	High or Low Energy?	High or Low Energy?
Hot or Cold?	Hot or Cold?	Hot or Cold?	Hot or Cold?
What solar panel produced the greatest energy and why?			
What solar panel produced the least energy and why?			